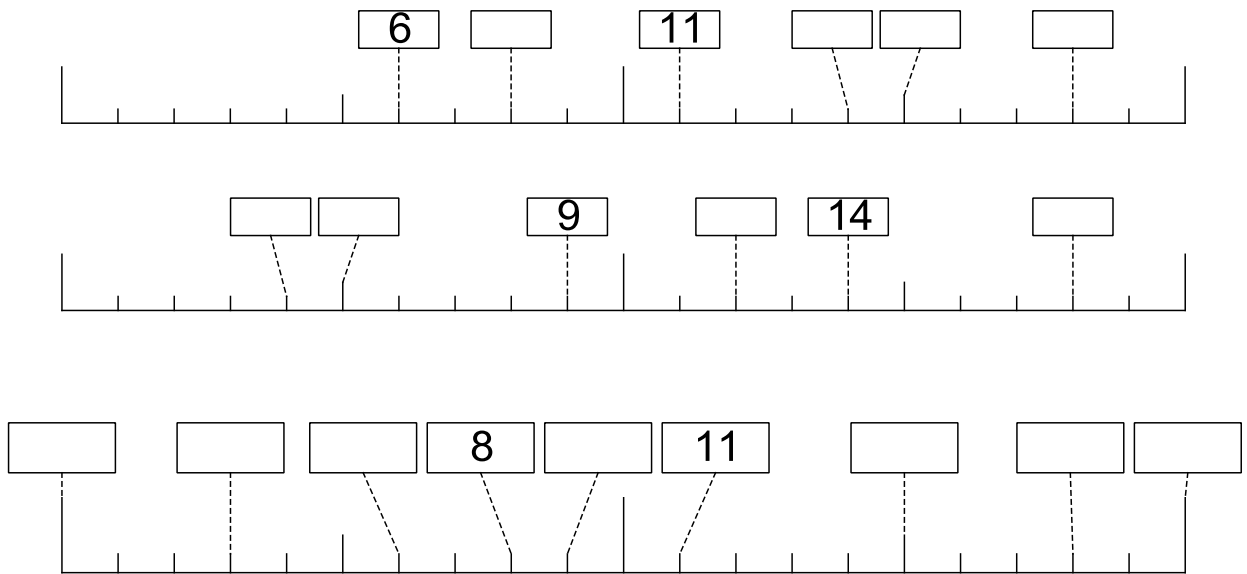


Setze die fehlenden Zahlen ein!



Löse die Aufgaben! Schaffst du es ohne Rechenhilfen?

$$15 + 4 = \underline{\quad}$$

$$13 + 2 = \underline{\quad}$$

$$4 + 9 = \underline{\quad}$$

$$3 + 4 = \underline{\quad}$$

$$6 + 13 = \underline{\quad}$$

$$12 + 4 = \underline{\quad}$$

$$9 + 7 = \underline{\quad}$$

$$5 + 12 = \underline{\quad}$$

$$1 + \underline{\quad} = 3$$

$$19 - 6 = \underline{\quad}$$

$$3 + \underline{\quad} = 8$$

$$16 - 6 = \underline{\quad}$$

$$\underline{\quad} + 6 = 18$$

$$20 - 10 = \underline{\quad}$$

$$\underline{\quad} + 8 = 18$$

$$14 - 2 = \underline{\quad}$$

$$16 - \underline{\quad} = 11$$

$$15 - \underline{\quad} = 11$$

$$\underline{\quad} - 2 = 16$$

$$20 - \underline{\quad} = 10$$

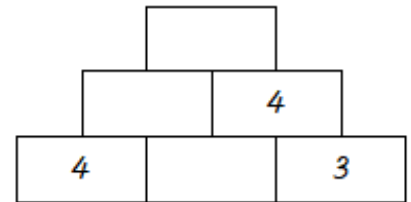
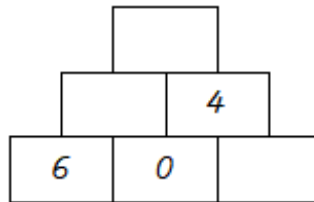
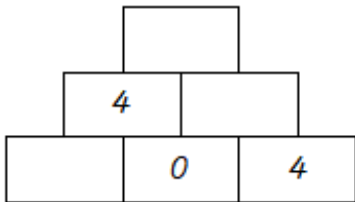
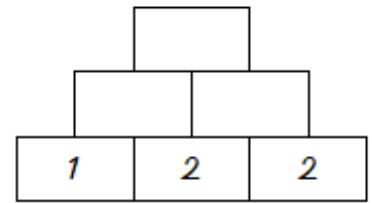
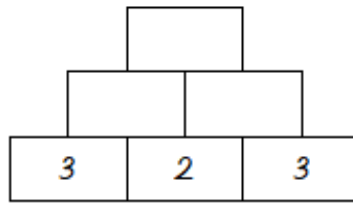
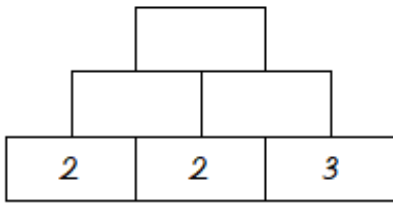
$$16 - 15 = \underline{\quad}$$

$$15 - \underline{\quad} = 12$$

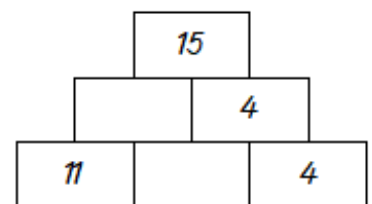
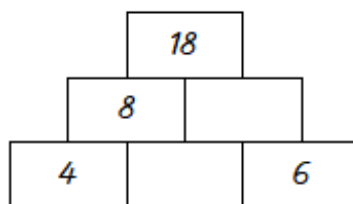
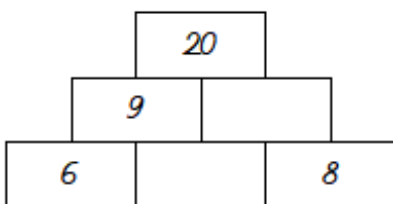
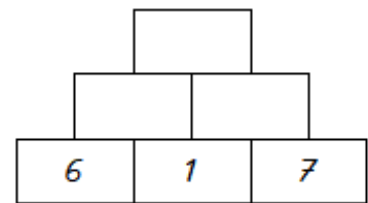
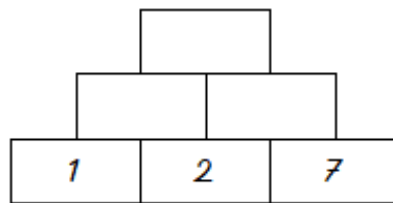
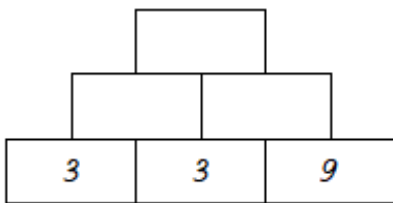
$$16 - \underline{\quad} = 5$$

$$16 - \underline{\quad} = 10$$

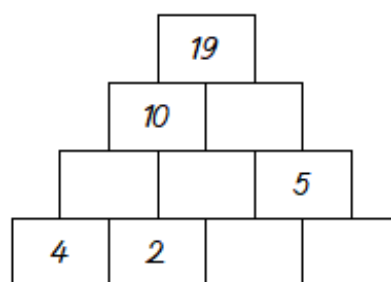
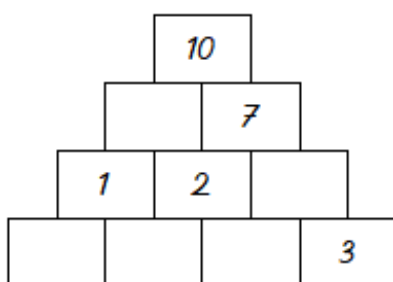
Löse die Zahlenmauer. Beispiel für die 1. Rechenmauer:  $2+2=4$   $2+3=5$ ;  $4+5=?$   
 Rechne von unten nach oben!



Hier wird es etwas schwieriger



Für Profis!



Das schaffst du ohne Rechenhilfen!

9	
	4
6	
3	
	2
4	

10	
10	
5	
	7
	10
	1

10	
5	
	6
6	
	8
9	

8	
	2
	4
	8
	7
	1

Hier wird es schwierig, schaffst du es? Du kannst Rechenhilfen benutzen!

16	
6	
	8
	1
13	
1	

17	
	3
	17
15	
4	
17	

17	
3	
	1
	10
	17
15	

18	
17	
11	
9	
	8
	10