



# Addieren ohne Hunderterübergang




## 1 Löse die Aufgaben.


a)  $334 + 45 = \underline{\quad}$



b)  $218 + 36 = \underline{\quad}$



c)  $527 + 46 = \underline{\quad}$



## 2 Ergänze die kleine Aufgabe. Rechne diese zuerst.

a)  $170 + 130 = \underline{\quad}$

$17 + 13 = \underline{\quad}$

$350 + 240 = \underline{\quad}$

$\underline{\quad} + \underline{\quad} = \underline{\quad}$

b)  $236 + 26 = \underline{\quad}$

$36 + 26 = \underline{\quad}$

$448 + 37 = \underline{\quad}$

$\underline{\quad} + \underline{\quad} = \underline{\quad}$

c)  $620 + 250 = \underline{\quad}$

$62 + 25 = \underline{\quad}$

$574 + 19 = \underline{\quad}$

$\underline{\quad} + \underline{\quad} = \underline{\quad}$

3 a)  $217 + 15 = \underline{\quad}$

$217 + 35 = \underline{\quad}$

$217 + 135 = \underline{\quad}$

$217 + 235 = \underline{\quad}$

b)  $325 + 200 = \underline{\quad}$

$325 + 225 = \underline{\quad}$

$325 + 250 = \underline{\quad}$

$325 + 275 = \underline{\quad}$

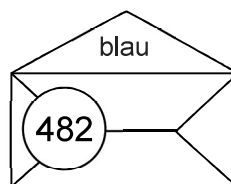
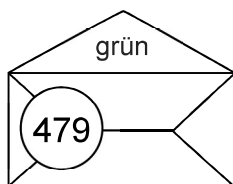
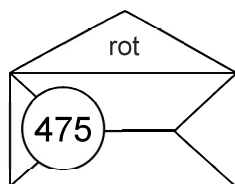
c)  $509 + 66 = \underline{\quad}$

$254 + 38 = \underline{\quad}$

$630 + 247 = \underline{\quad}$

$160 + 738 = \underline{\quad}$

## 4 Rechne und male an. Bilde für jeden Umschlag eine weitere Additionsaufgabe.



$250 + 232$

$426 + 56$

$405 + 77$

$221 + 254$

$335 + 140$

$330 + 149$

$225 + 254$

$117 + 362$

$143 + 332$

$258 + 217$

$\underline{\quad} + \underline{\quad}$

$\underline{\quad} + \underline{\quad}$

$\underline{\quad} + \underline{\quad}$