



Würfelnetz: Ja oder Nein

Entsteht aus den Flächen jeweils ein Würfel?

Name: _____

Klasse: _____ Datum: _____

1



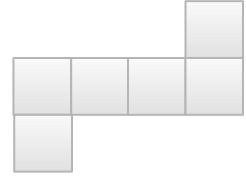
Ja Nein

2



Ja Nein

3



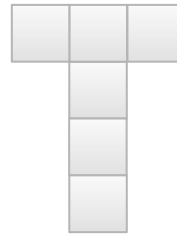
Ja Nein

4




Ja Nein

5




Ja Nein

6



Ja Nein

7



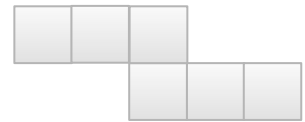
Ja Nein

8



Ja Nein

9



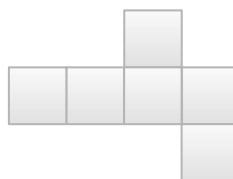
Ja Nein

10



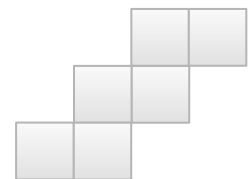
Ja Nein

11



Ja Nein

12



Ja Nein